


Angles

Angles

Angles measure how far something turns around a point. When two lines are joined together at a point, the angle between these two lines tells us how far they are apart.




A car door forms an angle with the rest of the car.



Two sides of a roof join at the top to create an angle.



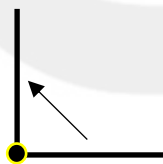
The pointy end of a pizza slice forms an angle.



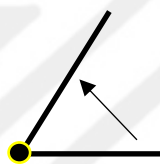
Objects such as balls can be thrown at different angles.

Different Types of Angles

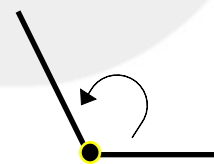
Learn the different types of angles below. How do you tell the difference between them?



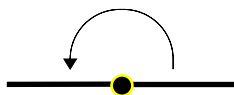
Right angle



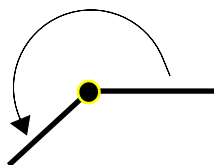
Acute angle



Obtuse angle



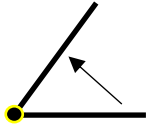

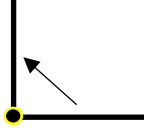

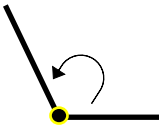
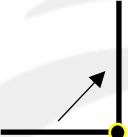

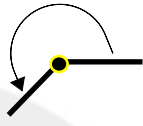

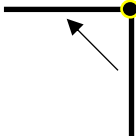
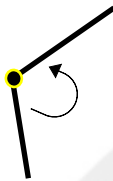
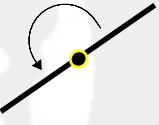
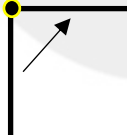


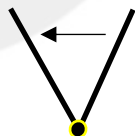

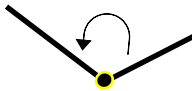
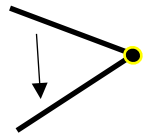
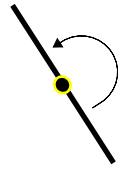
Straight angle



Reflex angle




Instructions: Label the angles correctly.

			
1	2	3	4
			
5	6	7	8
			
9	10	11	12
			
13	14	15	16
			
17	18	19	20

Angles

Angles

Angles measure how far something turns around a point. When two lines are joined together at a point, the angle between these two lines tells us how far they are apart.



A car door forms an angle with the rest of the car.



Two sides of a roof join at the top to create an angle.



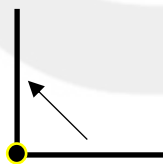
The pointy end of a pizza slice forms an angle.



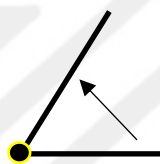
Objects such as balls can be thrown at different angles.

Different Types of Angles

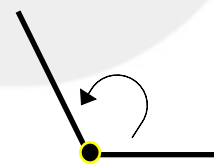
Learn the different types of angles below. How do you tell the difference between them?



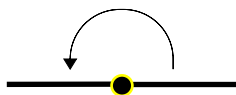
Right angle



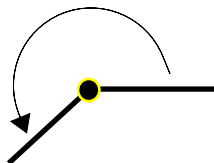
Acute angle



Obtuse angle



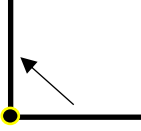
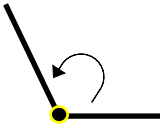
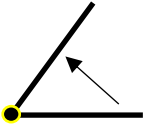

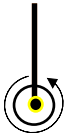
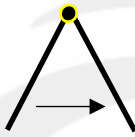
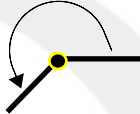

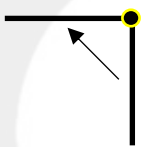
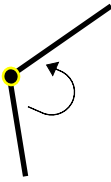
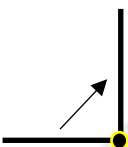
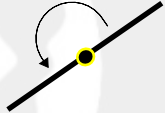
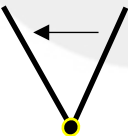
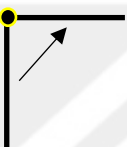


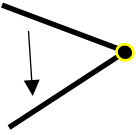
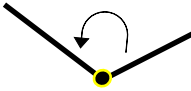
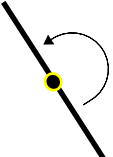
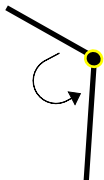
Straight angle



Reflex angle



Instructions: Label the angles correctly.

			
1	2	3	4
			
5	6	7	8
			
9	10	11	12
			
13	14	15	16
			
17	18	19	20