
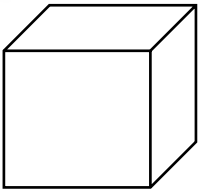
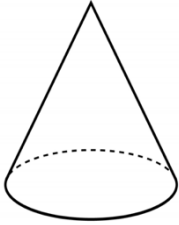


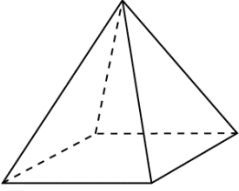


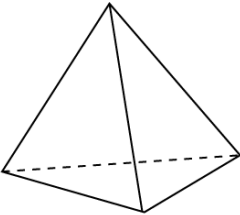


## More 3D Shapes

**Instructions:** Name the shapes and count their corners, edges and faces.

|   |   |   |
|---|---|---|
| 1 |    | <p>This 3D shape is called _____<br/>_____</p> <p>How many corners? _____</p> <p>How many edges? _____</p> <p>How many faces? _____</p> |
| 2 |  | <p>This 3D shape is called _____<br/>_____</p> <p>How many corners? _____</p> <p>How many edges? _____</p> <p>How many faces? _____</p> |
| 3 |  | <p>This 3D shape is called _____<br/>_____</p> <p>How many corners? _____</p> <p>How many edges? _____</p> <p>How many faces? _____</p> |



|   |   |   |
|---|---|---|
| 4 |    | <p>This 3D shape is called _____<br/>_____</p> <p>How many corners? _____</p> <p>How many edges? _____</p> <p>How many faces? _____</p> |
| 5 |   | <p>This 3D shape is called _____<br/>_____</p> <p>How many corners? _____</p> <p>How many edges? _____</p> <p>How many faces? _____</p> |
| 6 |  | <p>This 3D shape is called _____<br/>_____</p> <p>How many corners? _____</p> <p>How many edges? _____</p> <p>How many faces? _____</p> |
| 7 |  | <p>This 3D shape is called _____<br/>_____</p> <p>How many corners? _____</p> <p>How many edges? _____</p> <p>How many faces? _____</p> |