






















Find the Missing Number

Instructions: Write the missing number in each cupcake so that the division sentence is equal on both sides.

1	120	÷		=	84	÷	7
2	64	÷	8	=		÷	6
3		÷	10	=	35	÷	7
4	72	÷	12	=	48	÷	
5	48	÷		=	144	÷	12
6		÷	11	=	132	÷	12
7	63	÷	9	=		÷	8
8	54	÷		=	108	÷	12
9	60	÷	12	=		÷	25



10		÷	2	=	72	÷	8
11	18	÷	3	=		÷	11
12		÷	4	=	54	÷	9
13	110	÷	11	=		÷	3
14	99	÷	11	=	36	÷	
15	42	÷		=	56	÷	8
16	81	÷	9	=		÷	3
17		÷	4	=	32	÷	8
18	56	÷	7	=	64	÷	
19	132	÷	11	=		÷	12
20	63	÷	7	=	45	÷	