



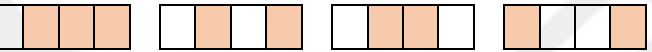


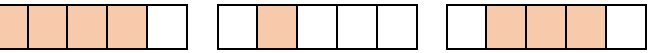


Improper & Mixed Fractions

Instructions: Write the fractions below. Simplify all mixed fractions.

Note: Mixed fractions are whole numbers mixed with fractions.

| | | Improper | Mixed |
|---|---|----------|-------|
| 1 |  | | |
| 2 |  | | |
| 3 |  | | |
| 4 |  | | |
| 5 |  | | |
| 6 |  | | |
| 7 |  | | |
| 8 |  | | |








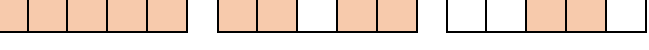


| | | Improper | Mixed |
|----|--|----------|-------|
| 1 | | | |
| 2 | | | |
| 3 | | | |
| 4 | | | |
| 5 | | | |
| 6 | | | |
| 7 | | | |
| 8 | | | |
| 9 | | | |
| 10 | | | |

Improper & Mixed Fractions

Instructions: Write the fractions below. Simplify all mixed fractions.

Note: Mixed fractions are whole numbers mixed with fractions.

| | | Improper | Mixed |
|---|---|----------|-------|
| 1 |  | | |
| 2 |  | | |
| 3 |  | | |
| 4 |  | | |
| 5 |  | | |
| 6 |  | | |
| 7 |  | | |
| 8 |  | | |



| | | Improper | Mixed |
|----|--|----------|-------|
| 1 | | | |
| 2 | | | |
| 3 | | | |
| 4 | | | |
| 5 | | | |
| 6 | | | |
| 7 | | | |
| 8 | | | |
| 9 | | | |
| 10 | | | |